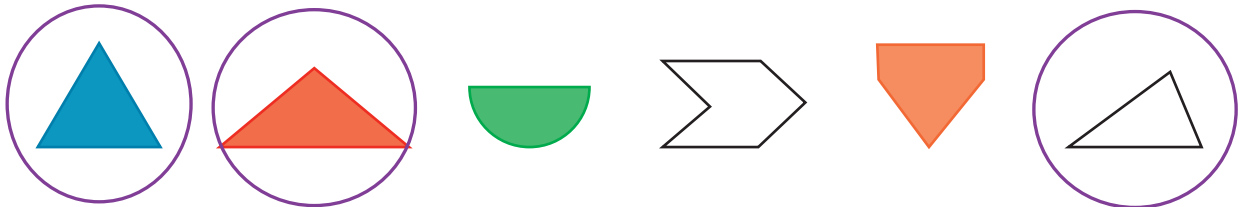




Name _____




1. Circle the shapes with **3** sides.



Draw a shape with **6** sides.

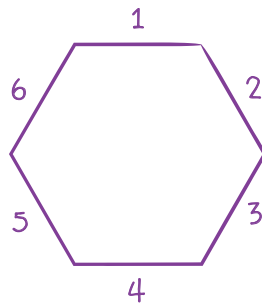
Sample:



I count the number of sides on each shape.

I know shapes with 3 sides are called triangles.

I draw a shape with 6 sides.




All sides have straight lines.

All sides connect, so my shape is closed.



REMEMBER

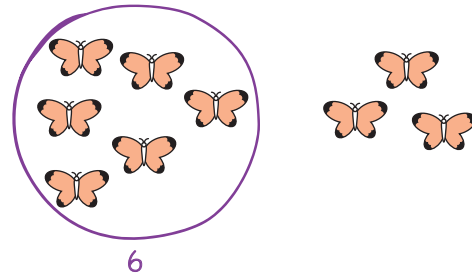
2. Count on to add.



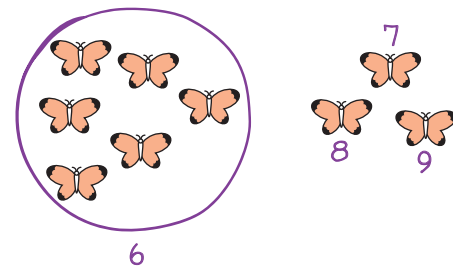
$$6 + 3 = 9$$

I see two groups of butterflies.

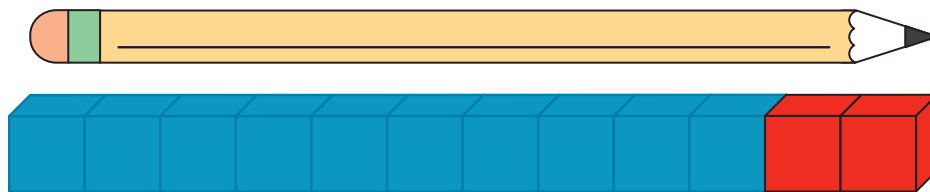
I circle a part I know.



Then, I count on from 6.



 3. Write the length of the pencil.



12

 centimeters

I see one 10-stick and 2 centimeter cubes.

I know $10 + 2 = 12$.

The pencil is 12 centimeters long.

